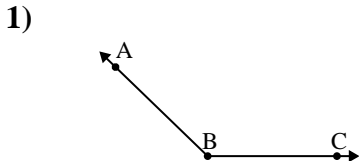




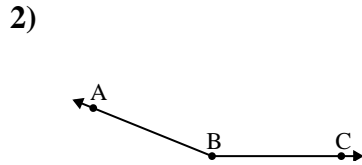
Solve each problem.

Answers



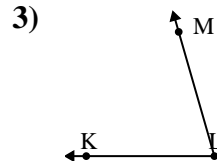
Which choice best represents  $\angle ABC$ ?

- A.  $32^\circ$
- B.  $112^\circ$
- C.  $174^\circ$
- D.  $136^\circ$



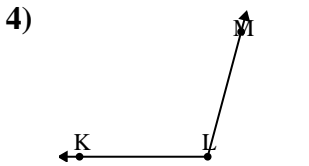
Which choice best represents  $\angle ABC$ ?

- A.  $49^\circ$
- B.  $131^\circ$
- C.  $4^\circ$
- D.  $158^\circ$



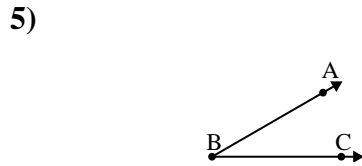
Which choice best represents  $\angle KLM$ ?

- A.  $74^\circ$
- B.  $43^\circ$
- C.  $103^\circ$
- D.  $3^\circ$



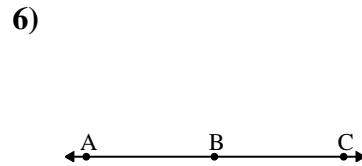
Which choice best represents  $\angle KLM$ ?

- A.  $105^\circ$
- B.  $138^\circ$
- C.  $67^\circ$
- D.  $42^\circ$



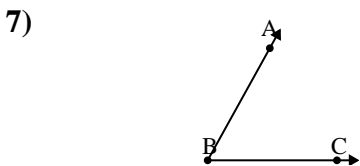
Which choice best represents  $\angle ABC$ ?

- A.  $78^\circ$
- B.  $145^\circ$
- C.  $30^\circ$
- D.  $1^\circ$



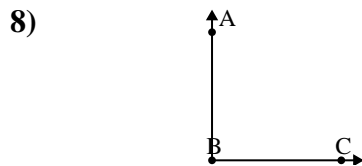
Which choice best represents  $\angle ABC$ ?

- A.  $143^\circ$
- B.  $86^\circ$
- C.  $14^\circ$
- D.  $180^\circ$



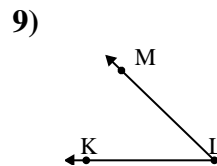
Which choice best represents  $\angle ABC$ ?

- A.  $159^\circ$
- B.  $12^\circ$
- C.  $97^\circ$
- D.  $61^\circ$



Which choice best represents  $\angle ABC$ ?

- A.  $143^\circ$
- B.  $90^\circ$
- C.  $165^\circ$
- D.  $2^\circ$



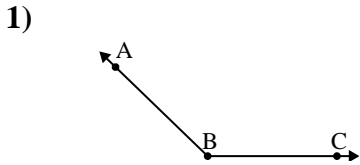
Which choice best represents  $\angle KLM$ ?

- A.  $114^\circ$
- B.  $23^\circ$
- C.  $44^\circ$
- D.  $74^\circ$

1. \_\_\_\_\_
2. \_\_\_\_\_
3. \_\_\_\_\_
4. \_\_\_\_\_
5. \_\_\_\_\_
6. \_\_\_\_\_
7. \_\_\_\_\_
8. \_\_\_\_\_
9. \_\_\_\_\_

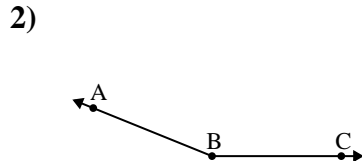


Solve each problem.



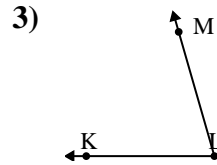
Which choice best represents  $\angle ABC$ ?

- A.  $32^\circ$
- B.  $112^\circ$
- C.  $174^\circ$
- D.  $136^\circ$



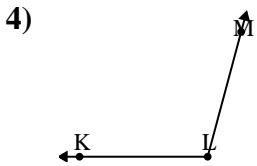
Which choice best represents  $\angle ABC$ ?

- A.  $49^\circ$
- B.  $131^\circ$
- C.  $4^\circ$
- D.  $158^\circ$



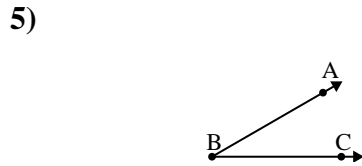
Which choice best represents  $\angle KLM$ ?

- A.  $74^\circ$
- B.  $43^\circ$
- C.  $103^\circ$
- D.  $3^\circ$



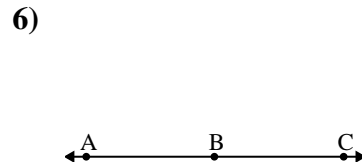
Which choice best represents  $\angle KLM$ ?

- A.  $105^\circ$
- B.  $138^\circ$
- C.  $67^\circ$
- D.  $42^\circ$



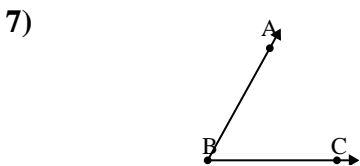
Which choice best represents  $\angle ABC$ ?

- A.  $78^\circ$
- B.  $145^\circ$
- C.  $30^\circ$
- D.  $1^\circ$



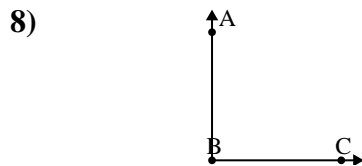
Which choice best represents  $\angle ABC$ ?

- A.  $143^\circ$
- B.  $86^\circ$
- C.  $14^\circ$
- D.  $180^\circ$



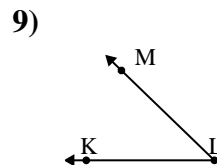
Which choice best represents  $\angle ABC$ ?

- A.  $159^\circ$
- B.  $12^\circ$
- C.  $97^\circ$
- D.  $61^\circ$



Which choice best represents  $\angle ABC$ ?

- A.  $143^\circ$
- B.  $90^\circ$
- C.  $165^\circ$
- D.  $2^\circ$



Which choice best represents  $\angle KLM$ ?

- A.  $114^\circ$
- B.  $23^\circ$
- C.  $44^\circ$
- D.  $74^\circ$

Answers

- 1. **D**
- 2. **D**
- 3. **A**
- 4. **A**
- 5. **C**
- 6. **D**
- 7. **D**
- 8. **B**
- 9. **C**